

## Let's Review!

A. Complete the addition and subtraction problems.

$$8 + \underline{\quad} = 13$$

$$14 - \underline{\quad} = 7$$



$$124 + 48 = \underline{\quad}$$

$$218 + 67 = \underline{\quad}$$

B. Solve the problems and fill in the blanks.

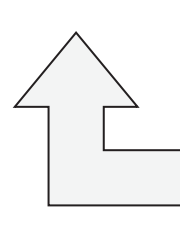
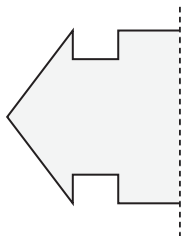
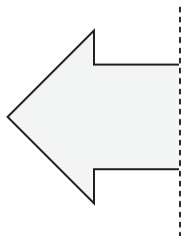
✓ How many tens are in 73? \_\_\_\_\_

✓ What time is 4 hours and 20 minutes **before** 11:40? \_\_\_\_\_

✓ What is the greatest number of coins you need to make 40¢ without using pennies? \_\_\_\_\_

✓ If one basket can hold 5 apples, how many baskets do you need to hold 40 apples? \_\_\_\_\_

C. Draw the other half of each shape to make it symmetrical.



D. Count by 4s to fill in the blanks.

4, 8, \_\_\_\_\_, \_\_\_\_\_, \_\_\_\_\_, \_\_\_\_\_, 28, \_\_\_\_\_, \_\_\_\_\_, 40

E. Ask your parents to tell you the numbers of some east-west and north-south highways. Record them. What do you notice?