

# CLIMB the Summer Slide 3rd level



Copyright 2018 Lee Giles  
All rights reserved.  
ISBN-13: 978-1985598737  
ISBN-10: 1985598736  
Last Updated: 2022



## Climb the Summer Slide



### Read

Dost thou know who made thee?  
Little lamb, I'll tell thee;  
Little lamb, I'll tell thee:  
He is called by thy name,  
For He calls Himself a Lamb.  
He is meek, and He is mild,  
He became a little child.  
I a child, and thou a lamb,  
We are called by His name.  
Little lamb, God bless thee!  
Little lamb, God bless thee!

Copy the first and last lines that repeat.

---

---

### Math

$7 \times 5 =$

$32 \div 8 =$

$9 \times 2 =$

$54 \div 6 =$

Solve the word problem.

86 people visited the dinosaur exhibit on Saturday.

There were 44 different exhibits at the science museum.

21 fewer people visited the exhibit on Sunday.

How many people visited the dinosaur exhibit on Sunday? \_\_\_\_\_

### Language Arts

Give each one-word sentence different ending punctuation.

Yeah

What

Okay



## Climb the Summer Slide



### Read

When the meadows laugh with lively green,  
And the grasshopper laughs in the merry scene;  
When Mary and Susan and Emily  
With their sweet round mouths sing 'Ha ha he!'

Can you write two words that rhyme with green and scene and two words that rhyme with Emily and "ha, ha, he?"

---

---

### Math

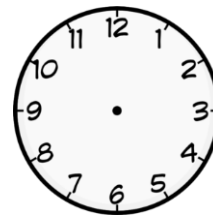
$$\begin{array}{r} 16 \\ + 34 \\ \hline \end{array}$$

$$\begin{array}{r} 83 \\ + 15 \\ \hline \end{array}$$

$$\begin{array}{r} 30 \\ - 7 \\ \hline \end{array}$$

$$\begin{array}{r} 38 \\ - 24 \\ \hline \end{array}$$

Draw the time: five till seven.



### Language Arts

Replace the three nouns with pronouns. Write them under the nouns.

Steve thanked Sarah for the present.



## Climb the Summer Slide



### Read

A Cat heard that the Birds in an aviary were ailing. So he got himself up as a doctor, and, taking with him a set of the instruments proper to his profession, presented himself at the door, and inquired after the health of the Birds. "We shall do very well," they replied, without letting him in, "when we've seen the last of you."

Finish the sentence as you like. (*A villain may disguise himself, but....*)

---

---

---

### Math

$6 \times 5 =$

$56 \div 8 =$

$9 \times 7 =$

$48 \div 6 =$

Draw a line to create four pieces instead of two. Write one half and the equivalent fraction that has a four as the denominator.



### Language Arts

Circle the linking verbs.

dream      sleep      is      was      run



## Climb the Summer Slide



### Read

An Old Crab said to her son, "Why do you walk sideways like that, my son? You ought to walk straight." The Young Crab replied, "Show me how, dear mother, and I'll follow your example." The Old Crab tried, but tried in vain, and then saw how foolish she had been to find fault with her child.

The mother was telling her son to walk straight. How did she walk?

---

### Math

$$\begin{array}{r} 38 \\ + 25 \\ \hline \end{array}$$

$$\begin{array}{r} 109 \\ + 34 \\ \hline \end{array}$$

$$\begin{array}{r} 63 \\ - 4 \\ \hline \end{array}$$

$$\begin{array}{r} 30 \\ - 8 \\ \hline \end{array}$$

How much money do you have if you have three dollars, three dimes, and the coins below?



\_\_\_\_\_

### Language Arts

Write the plurals of these words.

man

sheep

child

dog

\_\_\_\_\_

\_\_\_\_\_

\_\_\_\_\_

\_\_\_\_\_



## Climb the Summer Slide



### Read

Away back in the “twenties,” when Indiana was a baby state, and great forests of tall trees and tangled underbrush darkened what are now her bright plains and sunny hills, there stood upon the east bank of Big Blue River, a mile or two north of the point where that stream crosses the Michigan road, a cozy log cabin of two rooms one front and one back.

Describe your house.

---

---

### Math

$6 \times 4 =$

$32 \div 4 =$

$5 \times 7 =$

$36 \div 6 =$

Find the perimeter.



### Language Arts

What's wrong with the sentence? Find five things.

whats rong with this sentance.



# Climb the Summer Slide



## Read

Balser's arm mended slowly, for it had been terribly bitten by the bear. The heavy sleeve of his buckskin jacket had saved him from a wound which might have crippled him for life; but the hurt was bad enough as it was, and Balser passed through many days and nights of pain before it was healed. He bore the suffering like a little man, however, and felt very "big" as he walked about with his arm in a buckskin sling.

How did Balser feel? Write a sentence. (Balser felt....because....)

---



---

## Math

$$\begin{array}{r} 315 \\ + 46 \\ \hline \end{array}$$


$$\begin{array}{r} 126 \\ + 137 \\ \hline \end{array}$$

$$\begin{array}{r} 40 \\ - 27 \\ \hline \end{array}$$

$$\begin{array}{r} 89 \\ - 32 \\ \hline \end{array}$$

What time is it?

---



## Language Arts

Circle the letters that should be capitalized.

i'm going to alaska on monday, june fourth.





## Climb the Summer Slide



### Read

“You, Tom! You, Jerry! come here!” called Balser one morning, while he and Jim were sitting in the shade near the river in front of the house, overseeing the baby.

“You, Tom! You, Jerry!” called Balser a second time with emphasis. The cubs, snoozing in the sun a couple of paces away, rolled lazily over two or three times in an effort to get upon their feet, and then trotted to their masters with a comical, waddling gait that always set the boys laughing, it was such a swagger.

Act out a “comical, waddling gait” that was “such a swagger.”

### Math

$$3 \times 7 =$$

$$48 \div 8 =$$

$$7 \times 9 =$$

$$28 \div 4 =$$

Draw three lines to create eight pieces instead of two. (Hint: Divide the whole thing in half and then divide each section in half.) Write a fraction equivalent to one half with an eight in the denominator.



### Language Arts

Write a sentence using a contraction. Example: I am = I'm

---

---



## Climb the Summer Slide



### Read

One day Tom Fox was told by his mother to kindle the fire, which had been allowed to grow so dim that only a smoldering bed of embers was left upon the hearth. Hanging from the crane was a large kettle, almost full of water. Now, in addition to his reputation for freckles, Tom was also believed to be the awkwardest boy in the Blue River settlement. Upon the day above referred to, he did all in his power to live up to his reputation, by upsetting the kettle of water upon the fire, thereby extinguishing the last spark of that necessary element in the Fox household.

What did Tom do? Write a sentence.

---

---

### Math

$$\begin{array}{r} 434 \\ + 219 \\ \hline \end{array}$$

$$\begin{array}{r} 127 \\ + 538 \\ \hline \end{array}$$

$$\begin{array}{r} 52 \\ - 14 \\ \hline \end{array}$$

$$\begin{array}{r} 25 \\ - 19 \\ \hline \end{array}$$

How much change do you need if you buy something for twenty-five cents with a dollar bill?

---

### Language Arts

Write the plural of each word.

toy \_\_\_\_\_ cry \_\_\_\_\_

baby \_\_\_\_\_ city \_\_\_\_\_



## Climb the Summer Slide



### Read

When the children were alone, Liney proceeded to put the babies to sleep, and when those small heads of their respective households were dead to the world in slumber, rocked to that happy condition in a cradle made from the half of a round, smooth log, hollowed out with an adze, the other children huddled together in the fireplace to talk and to play games. Chief among the games was that never failing source of delight, "Simon says thumbs up."

What was their favorite game? Write a sentence.

---

### Math

$3 \times 8 =$

$81 \div 9 =$

$9 \times 5 =$

$42 \div 6 =$

Round these numbers to the nearest ten.

32 \_\_\_\_\_

57 \_\_\_\_\_

45 \_\_\_\_\_

### Language Arts

What's wrong with the sentence? Write the corrections.  
(6 things, hint: Mark's car)

tell finn he needs to sine up for mondays game?

---



## Climb the Summer Slide



### Read

Flatrock River takes its name from the fact that it flows over layers of broad flat rocks. The soil in its vicinity is underlaid at a depth of a few feet by a formation of stratified limestone, which crops out on the hillsides and precipices, and in many places forms deep, canon-like crevasses, through which the river flows. In these cliffs and miniature canons are many caves, and branching off from the river's course are many small side-canons, or gullies, which at night are black and repellent, and in many instances are quite difficult to explore.

Describe your back yard or a nearby park or trail? Write a sentence.

---

---

### Math


$$\begin{array}{r} 125 \\ + 455 \\ \hline \end{array}$$

$$\begin{array}{r} 637 \\ + 137 \\ \hline \end{array}$$

$$\begin{array}{r} 73 \\ - 24 \\ \hline \end{array}$$

$$\begin{array}{r} 300 \\ - 23 \\ \hline \end{array}$$

What time is it?



---

### Language Arts

Circle the letters that should be capitalized.

dr. martin luther king jr. was a preacher.



## Climb the Summer Slide



### Read

So the boys went to the barnyard and fed the horses and cows, and drove the sheep into the shed, and carried fodder from the huge stack and placed it against the north sides of the barn and shed to keep the wind from blowing through the cracks and to exclude the snow. When the stock was comfortable, cozy, and warm, the boys milked the cows, and brought to the house four bucketfuls of steaming milk, which they strained and left in the kitchen, rather than in the milk-house, that it might not freeze over night.

Describe a chore you have to do. Don't name it; tell what you do.

---

---

### Math

$4 \times 4 =$

$49 \div 7 =$

$4 \times 7 =$

$72 \div 8 =$

Write the fraction one third. Draw a line to divide it into six parts. Write the equivalent fraction.



### Language Arts

Put in the quotation marks.

My mom asked, Why are you doing that?



## Climb the Summer Slide



### Read

The boys quickly donned their heavy buck skin clothing and moccasins, and climbed down the pole to the room where their father and mother were sleeping. Jim awakened his parents with a cry of "Christmas Gift," but Balsar's attention was attracted to a barrel standing by the fireplace, which his father had brought from Brookville, and into which the boys had not been permitted to look the night before. Balsar had a shrewd suspicion of what the barrel contained, and his delight knew no bounds when he found, as he had hoped, that it was filled with steel traps of the size used to catch beavers, coons, and foxes.

What present were you excited to get? Write a sentence.

---

### Math

$$\begin{array}{r} 342 \\ + 239 \\ \hline \end{array}$$

$$\begin{array}{r} 158 \\ + 234 \\ \hline \end{array}$$

$$\begin{array}{r} 50 \\ - 14 \\ \hline \end{array}$$

$$\begin{array}{r} \$1.00 \\ - \$0.80 \\ \hline \end{array}$$

What coins should you get as change if you buy something for 45 cents with a dollar? Use the least number of coins.

---

### Language Arts

Write the plurals.

brick \_\_\_\_\_

box \_\_\_\_\_

kiss \_\_\_\_\_

bush \_\_\_\_\_



## Climb the Summer Slide



### Read

The Crow, her head cocked on one side, watched the Fox suspiciously. But she kept her beak tightly closed on the cheese and did not return his greeting. "What a charming creature she is!" said the Fox. "How her feathers shine! What a beautiful form and what splendid wings! Could she sing just one song, I know I should hail her Queen of Birds." Listening to these flattering words, the Crow forgot all her suspicion, and also her breakfast. She wanted very much to be called Queen of Birds. So she opened her beak wide to utter her loudest caw, and down fell the cheese straight into the Fox's open mouth.

Can you summarize this part of the story in one sentence?

---

---

### Math

$6 \times 3 =$

$63 \div 7 =$

$3 \times 9 =$

$35 \div 5 =$

Circle the numbers that show three hundredths.

0.3

0.03

0.003

$\frac{3}{10}$

$\frac{3}{100}$

### Language Arts

Write the comparative and superlative adjectives? (Hint: more, most)

good \_\_\_\_\_

happy \_\_\_\_\_



## Climb the Summer Slide



### Read

Emma, Miley and Kara had a fun day at the pool. They played water polo while giggling and splashing. They did flips off of the diving board. They laid out in the warm sun to soak up the vitamin D. They were glad for a day of fun in the sun.

What's the main idea of this paragraph?

---

---

### Math

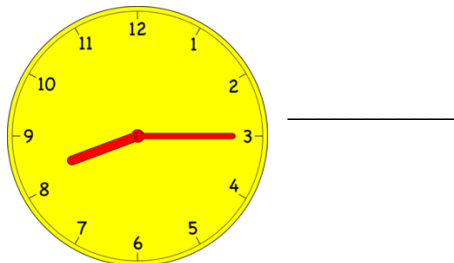
$$\begin{array}{r} 183 \\ + 135 \\ \hline \end{array}$$

$$\begin{array}{r} 292 \\ + 434 \\ \hline \end{array}$$

$$\begin{array}{r} 75 \\ - 28 \\ \hline \end{array}$$

$$\begin{array}{r} \$1.00 \\ - \$0.32 \\ \hline \end{array}$$

What time is it?



### Language Arts

Circle the letters that should be capitalized.

i have never been to disney world, nor have  
i ever been to beijing, china. on tuesday, april  
20<sup>th</sup>, I will get to go to the smithsonian.





## Climb the Summer Slide



### Read

Do you know what the fastest animal in the world is? If you answered cheetah, you're right. However, a cheetah can only run fast for less than half of a mile before being too exhausted to continue. If a cheetah were in a mile-long race, it would lose to a pronghorn.

A pronghorn is sometimes mistaken for an antelope, but is more related to the goat family. These unique animals can sustain speeds of around thirty miles an hour for twenty miles! Try to get a cheetah to do that, and you'll be quickly disappointed.

Next time someone asks you to run like a cheetah, remember the pronghorn and try to run like it instead.

What's the main idea?

---

---

### Math

$7 \times 8 =$

$36 \div 4 =$

$9 \times 4 =$

$54 \div 6 =$

Write three tenths as a fraction and a decimal.

---

---

### Language Arts

Can you write a homonym of each word?

bare \_\_\_\_\_

hare \_\_\_\_\_



## Climb the Summer Slide



Read

Wynken and Blynken are two little eyes,  
And Nod is a little head,  
And the wooden shoe that sailed the skies  
Is a wee one's trundle-bed;  
So shut your eyes while Mother sings  
Of wonderful sights that be,  
And you shall see the beautiful things  
As you rock in the misty sea  
Where the old shoe rocked the fishermen three:—  
Wynken,  
Blynken,  
And Nod.

Write two words that rhyme with a pair of rhyming words in the poem.

---

Math

$$\begin{array}{r} 342 \\ + 239 \\ \hline \end{array}$$

$$\begin{array}{r} 158 \\ + 234 \\ \hline \end{array}$$

$$\begin{array}{r} 50 \\ - 14 \\ \hline \end{array}$$

$$\begin{array}{r} \$1.00 \\ - \$0.20 \\ \hline \end{array}$$

What coins would you use to pay 73 cents with the least number of coins?

Language Arts

Write a compound sentence using a comma and conjunction.

---

---



## Climb the Summer Slide



### Read

- eminent – prominent, noteworthy, important
- incredulously – with unbelief
- anxiety – worry
- oblige – required
- disdainfully – with contempt, scornfully, to look down on others or something

Write a sentence using one of the words.

---

---

### Math

$7 \times 3 =$

$55 \div 5 =$

$8 \times 9 =$

$40 \div 5 =$

Write nine tenths and one hundredth as decimals.

\_\_\_\_\_

### Language Arts

Where does the comma go in this complex sentence? Add it in.

When I get home you can show me what you made.



## Climb the Summer Slide



### Read

The little old kitchen had quieted down from the bustle and confusion of mid-day; and now, with its afternoon manners on, presented a holiday aspect, that as the principal room in the brown house, it was eminently proper it should have. It was just on the edge of the twilight; and the little Peppers, all except Ben, the oldest of the flock, were enjoying a “breathing spell,” as their mother called it, which meant some quiet work suitable for the hour. All the “breathing spell” they could remember however, poor things; for times were always hard with them nowadays; and since the father died, when Phronsie was a baby, Mrs. Pepper had had hard work to scrape together money enough to put bread into her children’s mouths, and to pay the rent of the little brown house.

What’s it like in the house in the middle of the day (mid-day)?

---

### Math

$$\begin{array}{r} 59 \\ + 27 \\ \hline \end{array}$$

$$\begin{array}{r} 352 \\ + 284 \\ \hline \end{array}$$

$$\begin{array}{r} 57 \\ - 49 \\ \hline \end{array}$$

$$\begin{array}{r} \$1.00 \\ - \$0.56 \\ \hline \end{array}$$

How much time elapses between 11 AM and 1 PM?

---

### Language Arts

Circle the letters that should be capitalized in each proper noun.

We went to dominos after seeing the movie cars  
3 at the greenboro library.



## Climb the Summer Slide



### Read

- ample – full, enough, plentiful
- deliberation – carefully thinking over a decision
- dismally – with gloom and dreariness, pitifully

Use one of the words in a sentence.

---

---

### Math

$4 \times 3 =$

$36 \div 9 =$

$7 \times 6 =$

$24 \div 8 =$

Draw a picture to show the fraction seven tenths. Write the fraction and decimal.

### Language Arts

Which are correct? Circle the answers.

its fur

it's raining

its funny

it's eyes



## Climb the Summer Slide



### Read

And so, the minute her mother had departed for the minister's house next morning, and Ben had gone to his day's work, chopping wood for Deacon Blodgett, Polly assembled her force around the old stove, and proceeded to business. She and the children had been up early that morning to get through with the work; and now, as they glanced around with a look of pride on the neatly swept floor, the dishes all done, and everything in order, the moment their mother's back was turned they began to implore Polly to hurry and begin.

The kids wanted to make a cake, so what did they do?

---

---

### Math

Figure out the pattern and fill in the missing numbers.

36, 32, \_\_\_\_\_, 24, 20, 16, 12, 8, \_\_\_\_\_

You could also ask a parent for some money to count up today, bills and coins. Write the amount here.

### Language Arts

Write another word to make each an alliteration.

\_\_\_\_\_ food \_\_\_\_\_ soap



## Climb the Summer Slide



### Read

And now, Polly's cake was done, and ready for the oven. With many admiring glances from herself, and Phronsie, who with Seraphina, an extremely old but greatly revered doll, tightly hugged in her arms was watching everything with the biggest of eyes from the depths of the old chair, it was placed in the oven, the door shut to with a happy little bang, then Polly gathered Phronsie up in her arms, and sat down in the chair to have a good time with her and to watch the process of cooking.

Write at least five adjectives from the story above.

---

### Math

$$\begin{array}{r} 28 \\ + 56 \\ \hline \end{array}$$

$$\begin{array}{r} 189 \\ + 274 \\ \hline \end{array}$$

$$\begin{array}{r} 300 \\ - 175 \\ \hline \end{array}$$

$$\begin{array}{r} \$5.25 \\ - \$1.09 \\ \hline \end{array}$$

Write thirteen hundredths and thirty hundredths.

\_\_\_\_\_

### Language Arts

Underline verbs. Circle adjectives. Box nouns. Put a star above pronouns.

I like fried eggs and toast.

He is hungry.

They are eager to pet the soft puppy.



## Climb the Summer Slide



### Read

She looked worn and worried; she had been up nearly all night, back and forth from Ben's bed in the loft to restless, fretful little Phronsie in the big four-poster in the bedroom; for Phronsie wouldn't get into the crib. Polly had tried her best to help her, and had rubbed her eyes diligently to keep awake, but she was wholly unaccustomed to it, and her healthy, tired little body succumbed— and then when she awoke, shame and remorse filled her very heart.

What made her feel shame and remorse? Write a sentence.

---

---

### Math


$5 \times 7 =$

$64 \div 8 =$

$8 \times 9 =$

$28 \div 4 =$

What time is it?



---

### Language Arts

All names are proper nouns and should be capitalized. Circle the letters that should be capitalized.

billy graham was born in charlotte, north carolina.





## Climb the Summer Slide



### Read

When Phronsie, with many crows of delight, and much chattering, had gotten fairly started the following morning on her much-anticipated drive with the doctor, the whole family excepting Polly drawn up around the door to see them off, Mrs. Pepper resolved to snatch the time and run down for an hour or two to one of her customers who had long been waiting for a little "tailoring" to be done for her boys.

Can you summarize the above in a shorter sentence?

---

---

### Math

$$\begin{array}{r} 394 \\ + 295 \\ \hline \end{array}$$

$$\begin{array}{r} 273 \\ + 274 \\ \hline \end{array}$$

$$\begin{array}{r} 370 \\ - 223 \\ \hline \end{array}$$

$$\begin{array}{r} \$3.85 \\ - \$1.29 \\ \hline \end{array}$$

Draw a picture that shows symmetry. Draw a line of symmetry on the picture to see that the two halves are the same.

### Language Arts

Write the possessive using an apostrophe.

the dog of the boy \_\_\_\_\_

the color of the house \_\_\_\_\_



## Climb the Summer Slide



### Read

But as Joel was smitten down suddenly, so he came up quickly, and his hearty nature asserted itself by rapid strides toward returning health; and one morning he astonished them all by turning over suddenly and exclaiming:

“I want something to eat!”

“Bless the Lord!” cried Mrs. Pepper, “Now he’s going to live!”

Write the next thing Joel says. (Make it up.)

---

---

### Math

$3 \times 3 =$

$60 \div 10 =$

$7 \times 9 =$

$42 \div 6 =$

Draw a polygon, a closed shape with straight sides.

### Language Arts

Write the comparative adjective.

groovy \_\_\_\_\_

Write the superlative adjective.

beautiful \_\_\_\_\_



## Climb the Summer Slide



### Read

My neighborhood is full of interesting sights and sounds. ... These are just some of the things that make my neighborhood interesting.

Write three details to fill in the paragraph above.

---

---

---

---

### Math

$$\begin{array}{r} 195 \\ + 295 \\ \hline \end{array}$$

$$\begin{array}{r} 134 \\ + 274 \\ \hline \end{array}$$

$$\begin{array}{r} 80 \\ - 12 \\ \hline \end{array}$$

$$\begin{array}{r} \$6.78 \\ - \$3.15 \\ \hline \end{array}$$

Draw two congruent polygons. (Hint: Congruent shapes are equal in shape and size.)

### Language Arts

Put in the quotation marks.

Come quick! Mom called to us. You'll miss it!



## Climb the Summer Slide



### Read

One day, a few weeks after, Mrs. Pepper and Polly were busy in the kitchen. Phronsie was out in the "orchard," as the one scraggy apple-tree was called by courtesy, singing her rag doll to sleep under its sheltering branches. But "Baby" was cross and wouldn't go to sleep, and Phronsie was on the point of giving up, and returning to the house, when a strain of music made her pause with dolly in her apron. There she stood with her finger in her mouth, in utter astonishment, wondering where the sweet sounds came from.

Write a sentence telling where the sounds came from. (Make it up.)

---

---

### Math

$9 \times 9 =$

$54 \div 9 =$

$8 \times 8 =$

$40 \div 8 =$

If you left for the zoo at 9AM and got home at 2:30PM, how long were you gone?

---

### Language Arts

Underline verbs. Circle adjectives. Box nouns. Put a star above pronouns.

He wonders at the twinkling stars.

You are great at volleyball.



## Climb the Summer Slide



### Read

- vigorous – strong and active
- imposing – grand and impressive in appearance
- loiter– to dawdle over your work or to hang around some place without any purpose
- acquaintance – a person you know but not very well

Write a sentence using one of the words.

---

---

### Math

$$\begin{array}{r} 183 \\ + 634 \\ \hline \end{array}$$

$$\begin{array}{r} 241 \\ + 279 \\ \hline \end{array}$$

$$\begin{array}{r} 444 \\ - 127 \\ \hline \end{array}$$

$$\begin{array}{r} \$4.00 \\ - \$2.20 \\ \hline \end{array}$$

There are five boxes of cookies in each carton. There are four cartons. How many boxes of cookies are there all together?

### Language Arts

Change the period into a comma, add a conjunction, and turn this simple sentence into a compound sentence.

We like helping others. \_\_\_\_\_

---



## Climb the Summer Slide



### Read

One bright sunny morning in June, a tall, vigorous maiden of the mountain region climbed up the narrow path, leading a little girl by the hand. The youngster's cheeks were in such a glow that it showed even through her sun-browned skin. Small wonder though, for in spite of the heat, the little one, who was scarcely five years old, was bundled up as if she had to brave a bitter frost. Her shape was difficult to distinguish, for she wore two dresses, if not three, and around her shoulders a large red cotton shawl. With her feet encased in heavy hob-nailed boots, this hot and shapeless little person toiled up the mountain.

Why was she so hot? Write a sentence.

---

---

### Math

$4 \times 6 =$

$28 \div 7 =$

$7 \times 8 =$

$48 \div 8 =$

If there were 60 people in the theater and 25 leave, how many are left?

### Language Arts

Correct the spellings.

This droer is full of keys, paipr clips, pens, and pensils.

---



## Climb the Summer Slide



### Read

- vivacity — liveliness
- fret — to worry
- obstinate — Deta called Heidi obstinate when she refused to come with her. What do you think obstinate might mean?

Write a sentence using one of the words from above.

---

---

### Math

$$\begin{array}{r} 140 \\ + 390 \\ \hline \end{array}$$

$$\begin{array}{r} 508 \\ + 278 \\ \hline \end{array}$$

$$\begin{array}{r} 156 \\ - 132 \\ \hline \end{array}$$

$$\begin{array}{r} \$3.00 \\ - \$1.76 \\ \hline \end{array}$$

There are six people at checkout 1, five people at checkout 2, four people at checkout 3, and eight people at checkout 4. How many people are in line checking out at the store?

### Language Arts

Change the three nouns into pronouns.

Michael gave a gift to John.

---



## Climb the Summer Slide



### Read

Two winters had nearly passed. Heidi was happy, for the spring was coming again, with the soft delicious wind that made the fir-trees roar. Soon she would be able to go up to the pasture, where blue and yellow flowers greeted her at every step. She was nearly eight years old, and had learned to take care of the goats, who ran after her like little dogs. Several times the village teacher had sent word by Peter that the child was wanted in school, but the old man had not paid any attention to the message and had kept her with him as before. It was a beautiful morning in March. The snow had melted on the slopes, and was going fast. Snowdrops were peeping through the ground, which seemed to be getting ready for spring.

Write five adjectives from the paragraph above.

---

### Math

$5 \times 5 =$

$48 \div 8 =$

$8 \times 9 =$

$42 \div 7 =$

If you leave for your class at 3:30 PM and were gone for one and a half hours, what time did you get home?

### Language Arts

Write a homophone for each word.

eight \_\_\_\_\_ site \_\_\_\_\_





## Climb the Summer Slide



### Read

- indignant – feeling upset over something that's not right
- retort – to answer back in an angry way
- intimidate – to fill someone with fear
- accost – to confront boldly
- atrocious – shockingly bad

Write a sentence using one of the words above.

---

---

### Math

$$\begin{array}{r} 100 \\ + 398 \\ \hline \end{array}$$

$$\begin{array}{r} 198 \\ + 174 \\ \hline \end{array}$$

$$\begin{array}{r} 200 \\ - 74 \\ \hline \end{array}$$

$$\begin{array}{r} \$2.35 \\ - \$2.19 \\ \hline \end{array}$$

There are 100 pages in the book and Elizabeth has read 43 so far, how many more page does she have to finish the book?

### Language Arts

Underline verbs. Circle adjectives. Box nouns. Put a star above pronouns.

Did you enjoy the book?

We thought it was exciting.



## Climb the Summer Slide



### Read

"Oh well, that is better. But Miss Deta, the child seems peculiar for her age. I thought I told you that Miss Clara's companion would have to be twelve years old like her, to be able to share her studies. How old is Adelheid?"

"I am sorry, but I am afraid she is somewhat younger than I thought. I think she is about ten years old."

"Grandfather said that I was eight years old," said Heidi now. Deta gave her another blow, but as the child had no idea why, she did not get embarrassed.

"What, only eight years old!" Miss Rottenmeier exclaimed indignantly. "How can we get along? What have you learned? What books have you studied?"

Write what Heidi says next. (Make it up.)

---

---

### Math

$3 \times 4 =$

$27 \div 3 =$

$7 \times 5 =$

$72 \div 9 =$

There were six types of snack on the tray. There were eight of each type of snack. How many snacks were on the tray?

### Language Arts

Correct the spelling of the three homophones.

Due ewe hear the beet of the drum?



## Climb the Summer Slide



### Read

- perplexity — confusion
- loath – to really dislike something
- enmity – hatred
- luscious – highly pleasing to the senses

Write a sentence using one of the words above.

---

---

### Math

$$\begin{array}{r} 385 \\ + 496 \\ \hline \end{array}$$

$$\begin{array}{r} 589 \\ + 248 \\ \hline \end{array}$$

$$\begin{array}{r} 412 \\ - 156 \\ \hline \end{array}$$

$$\begin{array}{r} \$7.00 \\ - \$5.68 \\ \hline \end{array}$$

If there are 20 pretzels in the bag and five children wanting to eat them, how many pretzels can each child have?

### Language Arts

Write the pronoun that would replace the phrase. Use these sentences for a little help. You and I went to the store. He's talking to you and me.

you and I \_\_\_\_\_      you and me \_\_\_\_\_



## Climb the Summer Slide



### Read

A few days afterwards there was great excitement in the Sesemann residence, for the master of the house had just arrived. The servants were taking upstairs one load after another, for Mr. Sesemann always brought many lovely things home with him.

When he entered his daughter's room, Heidi shyly retreated into a corner. He greeted Clara affectionately, and she was equally delighted to see him, for she loved her father dearly.

Write two nouns and two pronouns from above.

---

### Math

$$8 \times 7 =$$

$$45 \div 9 =$$

$$3 \times 6 =$$

$$32 \div 8 =$$

If you had dinner at five thirty, what time did you go to bed if you went to bed three hours and fifteen minutes after dinner?

### Language Arts

Underline verbs. Circle adjectives. Box nouns. Put a star above pronouns.

Peter is making yummy cakes for them.

Rebecca is bringing the bags we need.



## Climb the Summer Slide



### Read

- obtrusive – butting in, intruding on another's space
- contempt – a feeling of despising toward people who are dishonorable or beneath you
- indignation – righteous anger, feeling upset by something that is unjust or not right

Write a sentence using one of the words above.

---

---

### Math

$$\begin{array}{r} 178 \\ + 467 \\ \hline \end{array}$$

$$\begin{array}{r} 139 \\ + 86 \\ \hline \end{array}$$

$$\begin{array}{r} 414 \\ - 228 \\ \hline \end{array}$$

$$\begin{array}{r} \$4.50 \\ - \$1.22 \\ \hline \end{array}$$

Write two fifths plus one fifth and add them together.

### Language Arts

Write the pronouns to replace the underlined names. Phoebe and Mark went to play. Give these to Phoebe and Mark.

---

---



## Climb the Summer Slide



### Read

- earnest – serious about what you mean or what you are doing
- console – to comfort
- evade – to avoid

Write a sentence using one of the words above.

---

---

### Math

$4 \times 5 =$

$72 \div 9 =$

$9 \times 6 =$

$24 \div 3 =$

What time is it?

---



### Language Arts

Circle the letters that should be capitalized.

this monday is christmas. It is always on december 25<sup>th</sup>. We're going to my grandparents' house in missouri.



## Climb the Summer Slide



### Read

Just then something in the basket, which had been only lightly fastened, moved, and one, two, three and still more little kittens jumped out, scampering around the room with the utmost speed. They bounded over the tutor's boots and bit his trousers; they climbed up on Miss Rottenmeier's dress and crawled around her feet. Mewing and running, they caused a frightful confusion. Clara called out in delight: "Oh, look at the cunning creatures; look how they jump! Heidi, look at that one, and oh, see the one over there?"

Write at least five verbs from the sentence.

---

---

### Math

$$\begin{array}{r} 254 \\ + 78 \\ \hline \end{array}$$

$$\begin{array}{r} 508 \\ + 294 \\ \hline \end{array}$$

$$\begin{array}{r} 135 \\ - 128 \\ \hline \end{array}$$

$$\begin{array}{r} \$10.00 \\ - \$ 3.15 \\ \hline \end{array}$$

What's next in the pattern? Write the number. (Hint: How do you get from 5 to 15 and from 15 to 10?)

5, 15, 10, 20, 15, 25, 20, 30, 25, 35, \_\_\_\_\_

### Language Arts

Underline five pronouns. Can you find them all?

We liked it so much we gave them ours.



## Climb the Summer Slide



### Read

- compensation – a payment for something
- despondent – feeling gloomy or discouraged

Write a sentence using the words.

---

---

### Math

$2 \times 20 =$

$54 \div 9 =$

$9 \times 8 =$

$25 \div 5 =$

How much money do you have left if you had five dollars and then bought something for a dollar thirty-five?

### Language Arts

Underline verbs. Circle adjectives. Box nouns. Put a star above pronouns.

The morning weather report says it is going to rain.

He is going to be late for class.

When you fret about your problems, you just make them bigger problems.





## Climb the Summer Slide



### Read

The grandmama, with her kind and loving way, immediately befriended the child and made her feel as if she had known her always. To the housekeeper's great mortification, she called the child Heidi, remarking to Miss Rottenmeier: "If somebody's name is Heidi, I call her so."

Write two nouns and two pronouns from above.

---

### Math

$$\begin{array}{r} 900 \\ + 800 \\ \hline \end{array}$$

$$\begin{array}{r} 1791 \\ + 2574 \\ \hline \end{array}$$

$$\begin{array}{r} 334 \\ - 127 \\ \hline \end{array}$$

$$\begin{array}{r} \$4.50 \\ - \$1.67 \\ \hline \end{array}$$

Which is the greater number: three tenths or three hundredths?

### Language Arts

Underline the main idea topic sentence and the conclusion.

My neighborhood is full of interesting sights and sounds. From my window I can see onto the other roofs and can watch people eat, sleep and play on them. I hear the "eskigi" call out asking for people's old metal. The children play soccer in the street between passing cars. These are just some of the things that make my neighborhood interesting.



## Climb the Summer Slide



### Read

At the moment when our story closes, Heidi and Peter are sitting in grandmother's hut. The little girl has so many interesting things to relate and Peter is trying so hard not to miss anything, that in their eagerness they are not aware that they are near the happy grandmother's chair. All summer long they have hardly met, and very many wonderful things have happened. They are all glad at being together again, and it is hard to tell who is the happiest of the group. I think Brigida's face is more radiant than any, for Heidi has just told her the story of the perpetual ten-penny piece. Finally the grandmother says: "Heidi, please read me a song of thanksgiving and praise. I feel that I must praise and thank the Lord for the blessings He has brought to us all!"

What happens next? (Make it up.)

---

---

### Math

If Grace buys a treat for three dollars for each of her five siblings, how much money does she spend?

If there are 12 chairs in the room and they need to be arranged into three groups, how many chairs need to go into each group?

### Language Arts

Finish the complex sentence. Add a comma and a complete sentence.

If I could do anything \_\_\_\_\_

---

EP provides free, complete, high quality online homeschool curriculum for children around the world. Find more of our courses and resources on our site, [allinonehomeschool.com](http://allinonehomeschool.com).



If you prefer offline materials, consider Genesis Curriculum which takes a book of the Bible and turns it into daily lessons in science, social studies, and language arts for your children to learn all together. The curriculum also includes learning Biblical languages. Genesis Curriculum offers Rainbow Readers and A Mind for Math, a math curriculum designed for about first through fourth grade to be done all together. Each math lesson is based on the day's Bible reading from the main curriculum. GC Steps is an offline preschool and kindergarten program. Learn more about our expanding curriculum on our site, [GenesisCurriculum.com](http://GenesisCurriculum.com).

