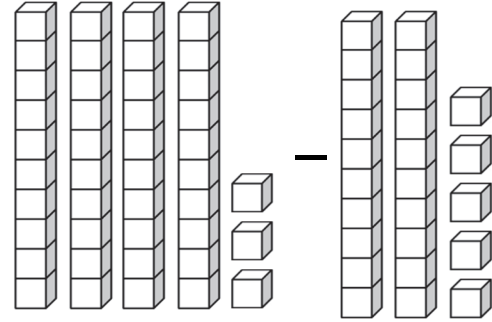

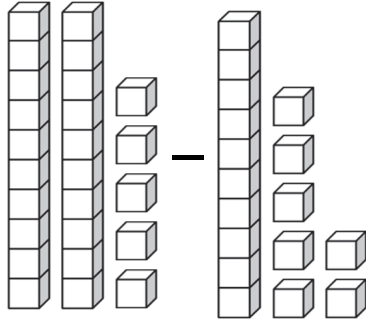


## Subtracting 2-Digits with Regrouping

A. Count the number of blocks. Fill in the blanks.



$$\underline{25} - \underline{17} = \underline{\quad\quad} \quad \underline{43} - \underline{18} = \underline{\quad\quad}$$

B. Let's practice subtraction with regrouping. The first one is done for you.

$\begin{array}{r} 5 \ 17 \\ \cancel{6} \cancel{7} \\ - 29 \\ \hline 38 \end{array}$	$\begin{array}{r} 94 \\ - 26 \\ \hline \square \end{array}$	$\begin{array}{r} 81 \\ - 47 \\ \hline \square \end{array}$	$\begin{array}{r} 76 \\ - 67 \\ \hline \square \end{array}$	$\begin{array}{r} 43 \\ - 18 \\ \hline \square \end{array}$	$\begin{array}{r} 90 \\ - 36 \\ \hline \square \end{array}$
---	---	---	---	---	---

C. Solve the subtraction problems. Some of the problems may need regrouping.

$\begin{array}{r} 74 \\ - 58 \\ \hline \square \end{array}$	$\begin{array}{r} 72 \\ - 27 \\ \hline \square \end{array}$	$\begin{array}{r} 75 \\ - 45 \\ \hline \square \end{array}$	$\begin{array}{r} 63 \\ - 49 \\ \hline \square \end{array}$	$\begin{array}{r} 29 \\ - 25 \\ \hline \square \end{array}$	$\begin{array}{r} 83 \\ - 67 \\ \hline \square \end{array}$
---	---	---	---	---	---

$\begin{array}{r} 84 \\ - 29 \\ \hline \square \end{array}$	$\begin{array}{r} 96 \\ - 56 \\ \hline \square \end{array}$	$\begin{array}{r} 60 \\ - 18 \\ \hline \square \end{array}$	$\begin{array}{r} 95 \\ - 63 \\ \hline \square \end{array}$	$\begin{array}{r} 67 \\ - 30 \\ \hline \square \end{array}$	$\begin{array}{r} 91 \\ - 58 \\ \hline \square \end{array}$
---	---	---	---	---	---