



Counting to Subtract – Lesson 142

Draw X over the objects to subtract. Count the remaining objects.



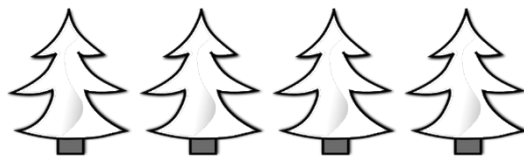
$$5 - 1 = \underline{4}$$




$$5 - 2 = \underline{\quad}$$



$$4 - 1 = \underline{\quad}$$



$$4 - 2 = \underline{\quad}$$



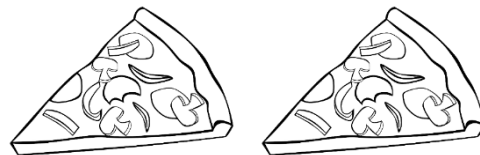
$$3 - 1 = \underline{\quad}$$



$$3 - 2 = \underline{\quad}$$



$$2 - 1 = \underline{\quad}$$



$$2 - 2 = \underline{\quad}$$