



Counting to Subtract – Lesson 136


When you subtract, you take away some objects from a group. $5 - 3 = 2$ means “you take away 3 objects from a group of 5 objects and 2 objects remain.” Draw **X** over the objects to take away. How many objects remain?

 $5 - 1 = \boxed{4}$




 $5 - 2 = \boxed{}$




 $5 - 3 = \boxed{}$




 $5 - 4 = \boxed{}$



 $5 - 5 = \boxed{}$



 $5 - 0 = \boxed{}$