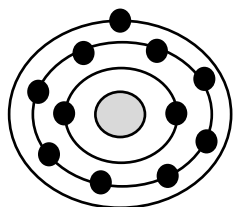
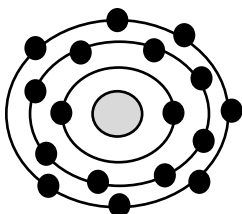


Ionic Bonds

Write a short description beside each picture to show the process of ionic bonding. The first one is done for you.

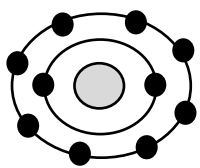
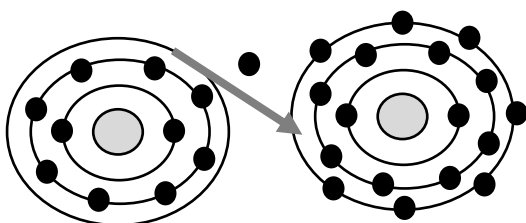
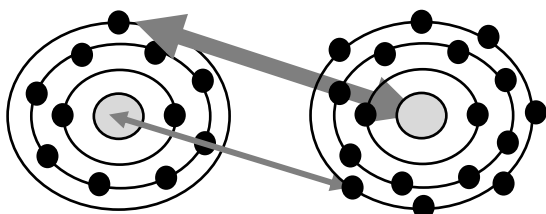


Sodium

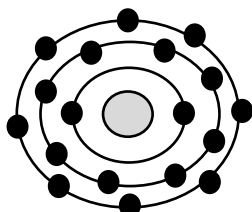


Chlorine

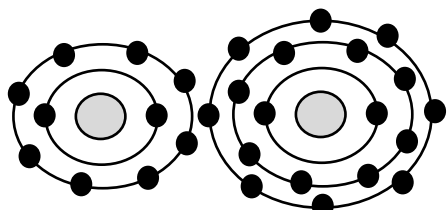
An atom of sodium and an atom of chlorine are near each other.



$+$
Sodium ion



$-$
Chloride ion



$+$ $-$
Sodium Chloride (NaCl)