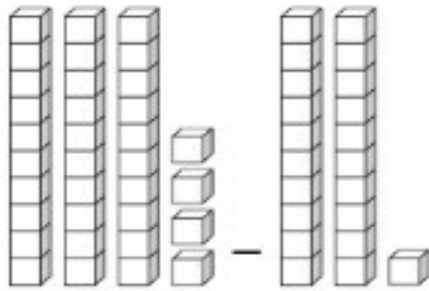
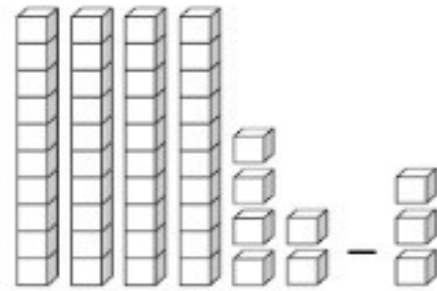


Subtracting Tens and Ones

A. Count the number of blocks. Fill in the blanks.




$$\underline{34} - \underline{21} = \underline{13}$$



$$\underline{46} - \underline{3} = \underline{43}$$

B. Let's practice subtracting tens and ones.

$\begin{array}{r} 69 \\ - 47 \\ \hline \end{array}$	$\begin{array}{r} 78 \\ - 44 \\ \hline \end{array}$	$\begin{array}{r} 98 \\ - 63 \\ \hline \end{array}$	$\begin{array}{r} 74 \\ - 32 \\ \hline \end{array}$	$\begin{array}{r} 86 \\ - 56 \\ \hline \end{array}$	$\begin{array}{r} 95 \\ - 43 \\ \hline \end{array}$
$\boxed{22}$	$\boxed{34}$	$\boxed{35}$	$\boxed{42}$	$\boxed{30}$	$\boxed{52}$



$\begin{array}{r} 87 \\ - 2 \\ \hline \end{array}$	$\begin{array}{r} 19 \\ - 2 \\ \hline \end{array}$	$\begin{array}{r} 48 \\ - 6 \\ \hline \end{array}$
$\boxed{85}$	$\boxed{17}$	$\boxed{42}$

$\begin{array}{r} 59 \\ - 3 \\ \hline \end{array}$	$\begin{array}{r} 47 \\ - 5 \\ \hline \end{array}$	$\begin{array}{r} 36 \\ - 2 \\ \hline \end{array}$
$\boxed{56}$	$\boxed{42}$	$\boxed{34}$