

## Let's Review!

A. Read each problem. Which and how many coins does each person have?

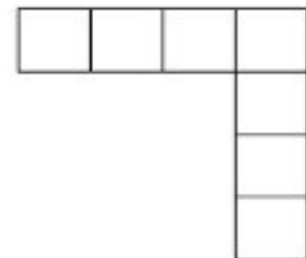
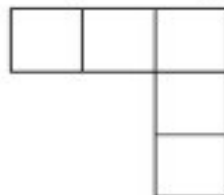
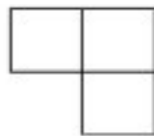


	25¢	10¢	5¢	1¢
Richard has three coins. The total amount is 12¢.	0	1	0	2
Cooper has four coins. The total amount is 25¢.	0	1	3	0
Gary has five coins. The total amount is 37¢.	1	0	2	2

B. Draw the next set of hearts to complete the pattern.



C. Draw the next set of blocks to complete the pattern.



D. Read the story problem. What do you think?

There are goats, chickens, pigs, and dogs in the farmyard. You go out and count 22 legs. Which animals might you see?

The answer may vary, but you should see at least one chicken.