

Let's Review!

A. Solve the subtraction problems.

$15 - 8 = \underline{7}$




$60 - 20 = \underline{40}$

$17 - 9 = \underline{8}$



$90 - 30 = \underline{60}$

B. Fill in the missing number. Use your 100s chart (Day 92) if you need help.

16	17		38	39		72	73	74	
26	27	28	47	48	49	81	82	83	84
	37	38	57	58		92	93		

C. Read each question and fill in the blank.

✓ Is 57 closer to 50 or 60? **60**✓ November is the 11th month. **March** is the **3rd** month.✓ Ella has **thirteen** stickers. Thomas has **five** stickers. Ella has **8** more stickers than Thomas.

D. Write the number that is ten less than:

7 is ten less than 1720 is ten less than 3077 is ten less than 87

E. Write the sum or difference:

 $6 + 8 = \underline{14}$ $9 + 4 = \underline{13}$ $13 - 7 = \underline{6}$