



Time Passages: To the Half Hour


Draw the clock hands to show the passage of time.




What time will it be
in 4 hours 0 minutes?




What time will it be
in 8 hours 0 minutes?




What time will it be
in 2 hours 30 minutes?



What time will it be
in 3 hours 30 minutes?



What time will it be
in 3 hours 30 minutes?



What time will it be
in 5 hours 0 minutes?

