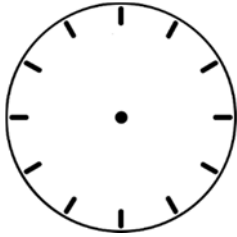





Telling Time & Adding 2-Digits


A. Draw the hands on each clock face to show the time.




12:20




6:05



9:35



1:50



10:40



1:32



9:41



11:24



6:58

B. Solve the addition problems. The first one is done for you!

$$\begin{array}{r} 1 \\ 59 \\ + 83 \\ \hline 142 \end{array}$$

$$\begin{array}{r} 23 \\ + 74 \\ \hline \end{array}$$

$$\begin{array}{r} 74 \\ + 52 \\ \hline \end{array}$$

$$\begin{array}{r} 68 \\ + 34 \\ \hline \end{array}$$

$$\begin{array}{r} 49 \\ + 75 \\ \hline \end{array}$$

$$\begin{array}{r} 20 \\ + 35 \\ \hline \end{array}$$

$$\begin{array}{r} 17 \\ + 92 \\ \hline \end{array}$$

$$\begin{array}{r} 54 \\ + 58 \\ \hline \end{array}$$

$$\begin{array}{r} 74 \\ + 94 \\ \hline \end{array}$$

$$\begin{array}{r} 37 \\ + 86 \\ \hline \end{array}$$

$$\begin{array}{r} 28 \\ + 68 \\ \hline \end{array}$$

$$\begin{array}{r} 58 \\ + 42 \\ \hline \end{array}$$