



Let's Review! I

A. Complete the problems.

$\begin{array}{r} 2635 \\ + \\ \hline 7350 \end{array}$	$\begin{array}{r} 5325 \\ - 2647 \\ \hline \end{array}$	$\begin{array}{r} \\ \times 5 \\ \hline 25 \end{array}$	$\begin{array}{r} 8 \\ \times \\ \hline 72 \end{array}$	$\begin{array}{r} 36 \\ \div 6 \\ \hline \end{array}$	$\begin{array}{r} 54 \\ \div \\ \hline 9 \end{array}$
--	--	---	--	--	--

B. Count by fourths from 5 to 7.

5	$5\frac{1}{4}$						7
---	----------------	--	--	--	--	--	---

C. Solve each word problem. Use the space on the right for your work area.

The store sold 20 cookies for \$1.00 each. Their cost per cookie is \$0.45. What was the profit?

Three children share a box of candies equally. Each gets 7 candies. There are then 2 candies left. How many candies were in the box originally?

Find the median and range of Kate's math scores:

92, 84, 81, 76, 93, 76, 85

Median:

Range:

D. Complete the next worksheet, too.

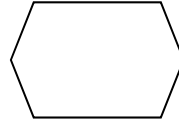
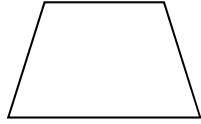
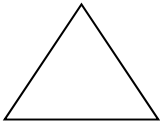


Let's Review! II

D. Write your answers in the blanks provided.

✓ 700 cm = _____ m ✓ There are _____ nickels in \$2.65.

E. How many obtuse angles are within each shape?



F. Find two numbers whose product would be between 250 and 300. Can you find more pairs?

G. James wants to build a rectangular pen with 16 feet of fencing. Assuming the dimensions (length and width) are to be whole numbers, answer the following.

- a) Draw and label all the possible rectangles that James could make.
- b) Find and record the area of each rectangle.
- c) Color in the rectangle that gives the greatest area.