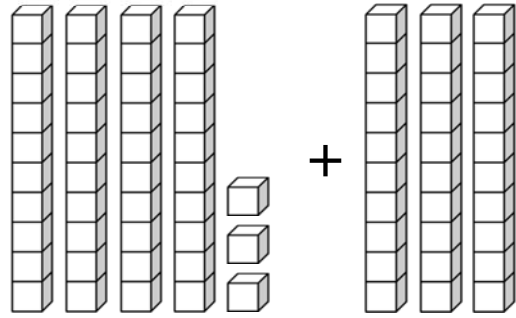
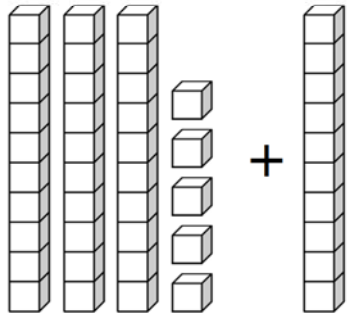


Counting by 10s & Adding Tens

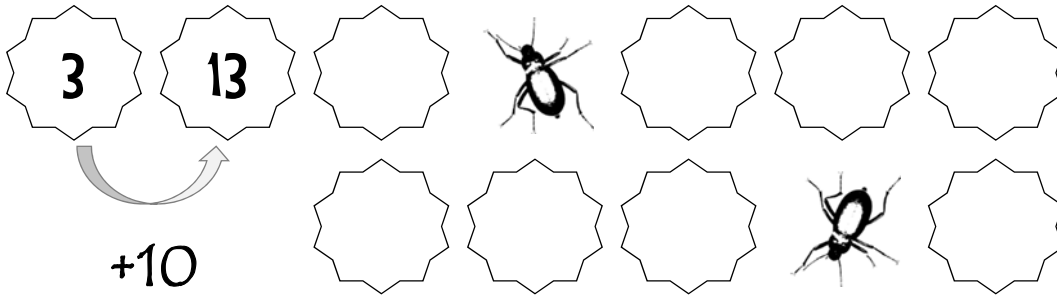
A. Count the number of blocks. Fill in the blanks.



$$\underline{35} + \underline{10} = \underline{\quad}$$

$$\underline{\quad} + \underline{\quad} = \underline{\quad}$$

B. Count by 10s. Fill in the missing numbers.



C. Solve the addition problems.

75	10	33	10	68	10
+ 10	+ 56	+ 10	+ 19	+ 10	+ 10
<input type="text"/>	<input type="text"/>	<input type="text"/>	<input type="text"/>	<input type="text"/>	<input type="text"/>

46	37	62	51	46	40
+ 10	+ 20	+ 10	+ 30	+ 20	+ 13
<input type="text"/>	<input type="text"/>	<input type="text"/>	<input type="text"/>	<input type="text"/>	<input type="text"/>