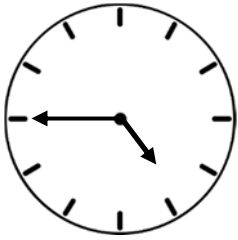
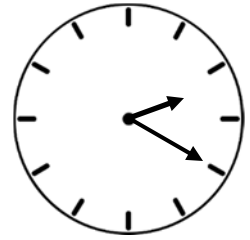


Time Words & Adding 2-Digits

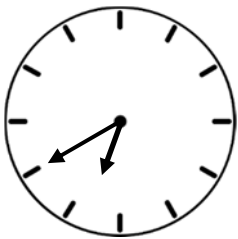
A. Draw lines to match each clock with the time in word form.



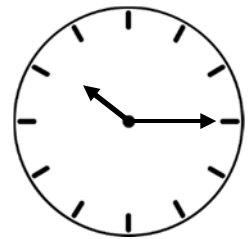
quarter to five




quarter past ten



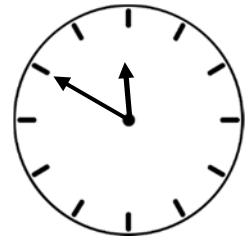
half past twelve



ten to twelve



twenty after two



twenty to seven



B. Solve the addition problems.

$$\begin{array}{r} 69 \\ + 23 \\ \hline \end{array}$$

$$\begin{array}{r} 73 \\ + 74 \\ \hline \end{array}$$

$$\begin{array}{r} 47 \\ + 25 \\ \hline \end{array}$$

$$\begin{array}{r} 56 \\ + 34 \\ \hline \end{array}$$

$$\begin{array}{r} 91 \\ + 75 \\ \hline \end{array}$$

$$\begin{array}{r} 20 \\ + 45 \\ \hline \end{array}$$

$$\begin{array}{r} 45 \\ + 49 \\ \hline \end{array}$$

$$\begin{array}{r} 74 \\ + 38 \\ \hline \end{array}$$

$$\begin{array}{r} 54 \\ + 24 \\ \hline \end{array}$$

$$\begin{array}{r} 27 \\ + 36 \\ \hline \end{array}$$

$$\begin{array}{r} 68 \\ + 45 \\ \hline \end{array}$$

$$\begin{array}{r} 63 \\ + 32 \\ \hline \end{array}$$