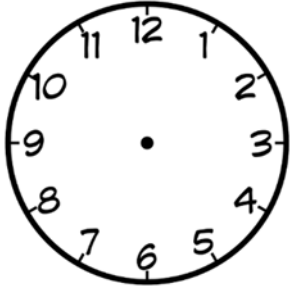
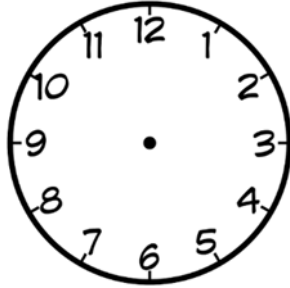


## Telling Time & Let's Review!

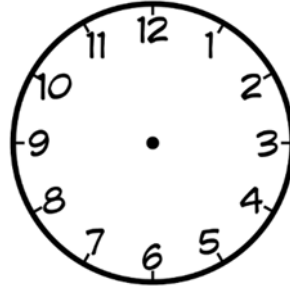
A. Draw the hands on each clock face to show the time.



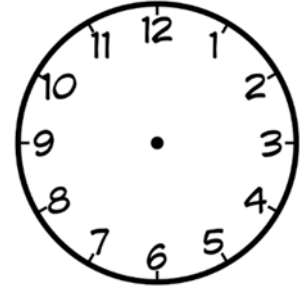
2:45



9:30



11:15



6:45

B. Write the words as numbers.

sixty-eight \_\_\_\_\_

ninety-seven \_\_\_\_\_

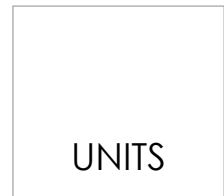
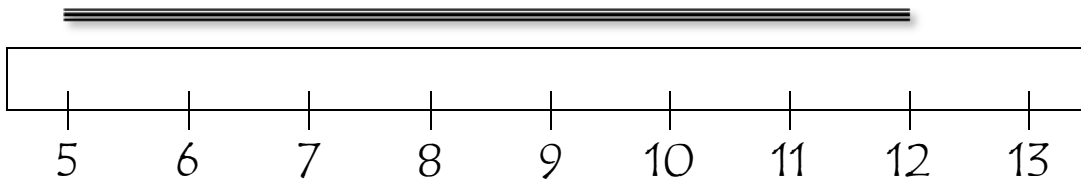


C. Write the amounts of money.

twelve dollars \_\_\_\_\_

eighteen dollars \_\_\_\_\_

D. Leah has a broken ruler to measure the string. How long is it?



E. Solve the problems and fill in the blanks.

✓ What comes next? 325, 323, 321, 319, \_\_\_\_\_, \_\_\_\_\_, \_\_\_\_\_

✓ 4 tens + 5 hundreds + 3 hundreds + 3 ones = \_\_\_\_\_

✓ How many legs do six cows have in total? \_\_\_\_\_

✓ How many wings do five ducks have in total? \_\_\_\_\_

