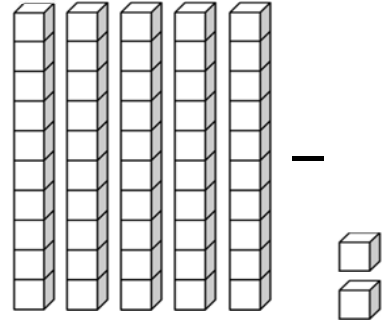

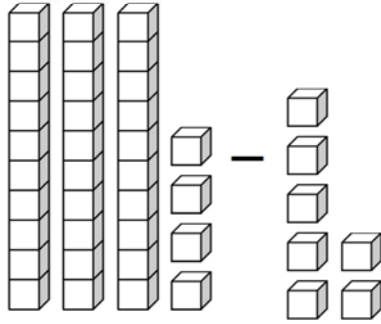


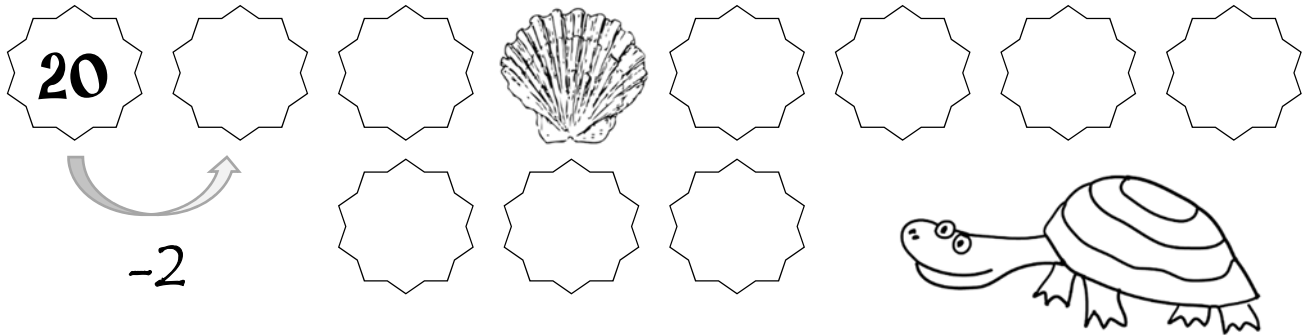
Subtracting 1-Digit with Regrouping

A. Count the number of blocks. Fill in the blanks.



34 - 7 = _____ _____ - _____ = _____

B. Count back by 2s. Fill in the missing numbers.



C. Solve the subtraction problems. Some of the problems may need regrouping.

12	7	13	28	10	15
- 2	- 2	- 2	- 2	- 2	- 2
<input type="text"/>	<input type="text"/>	<input type="text"/>	<input type="text"/>	<input type="text"/>	<input type="text"/>

21	59	20	36	64	11
- 2	- 2	- 2	- 2	- 2	- 2
<input type="text"/>	<input type="text"/>	<input type="text"/>	<input type="text"/>	<input type="text"/>	<input type="text"/>