



# Let's Review!

A. Solve the addition problems.

$$\begin{array}{r} 25 \\ + 55 \\ \hline \end{array}$$

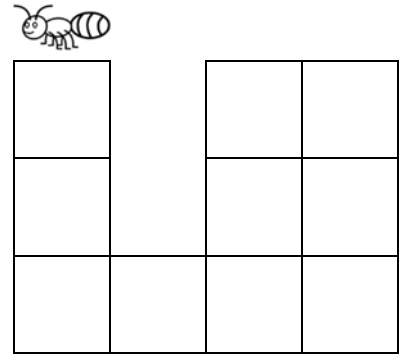

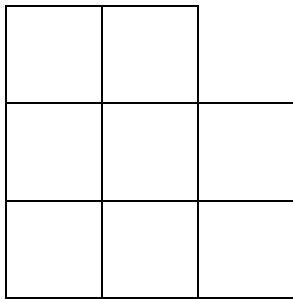

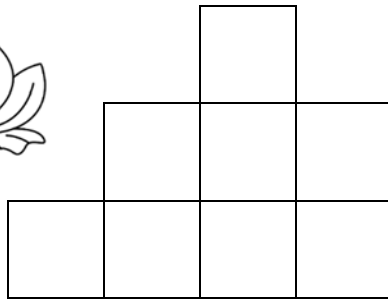

$$\begin{array}{r} 350 \\ + 260 \\ \hline \end{array}$$

$$\begin{array}{r} 122 \\ + 357 \\ \hline \end{array}$$

$$\begin{array}{r} 529 \\ + 312 \\ \hline \end{array}$$

$$\begin{array}{r} 349 \\ + 324 \\ \hline \end{array}$$

B. Color one-half of each shape with your favorite color!



C. Solve the word problem. Use the space on the right for your work area.

A tree has four branches.  
Each branch has two nests.  
Each nest has five eggs.  
How many eggs are there in all?