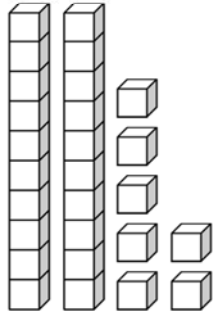
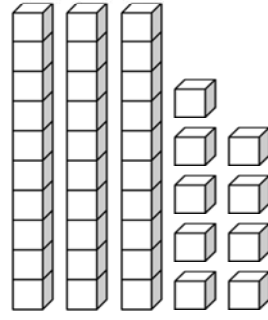
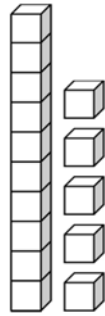


Subtracting 2-Digits without Regrouping

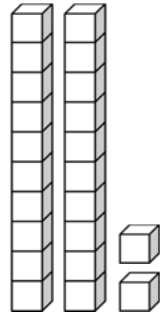
A. Count the number of blocks. Fill in the blanks.



-



-



27 - 15 = _____ _____ - _____ = _____



B. Solve the subtraction problems.

$$\begin{array}{r} 95 \\ - 84 \\ \hline \end{array}$$

$$\begin{array}{r} 79 \\ - 41 \\ \hline \end{array}$$

$$\begin{array}{r} 68 \\ - 34 \\ \hline \end{array}$$

$$\begin{array}{r} 97 \\ - 45 \\ \hline \end{array}$$

$$\begin{array}{r} 68 \\ - 57 \\ \hline \end{array}$$

$$\begin{array}{r} 49 \\ - 37 \\ \hline \end{array}$$

$$\begin{array}{r} 86 \\ - 54 \\ \hline \end{array}$$

$$\begin{array}{r} 98 \\ - 32 \\ \hline \end{array}$$

$$\begin{array}{r} 59 \\ - 39 \\ \hline \end{array}$$

$$\begin{array}{r} 87 \\ - 62 \\ \hline \end{array}$$

$$\begin{array}{r} 49 \\ - 25 \\ \hline \end{array}$$

$$\begin{array}{r} 75 \\ - 61 \\ \hline \end{array}$$

$$\begin{array}{r} 35 \\ - 10 \\ \hline \end{array}$$

$$\begin{array}{r} 54 \\ - 41 \\ \hline \end{array}$$

$$\begin{array}{r} 78 \\ - 31 \\ \hline \end{array}$$

$$\begin{array}{r} 95 \\ - 62 \\ \hline \end{array}$$

$$\begin{array}{r} 86 \\ - 32 \\ \hline \end{array}$$

$$\begin{array}{r} 49 \\ - 12 \\ \hline \end{array}$$