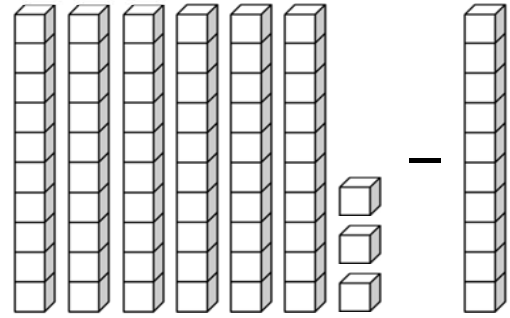
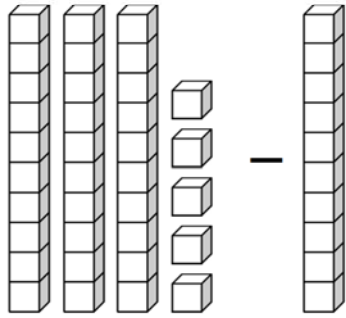



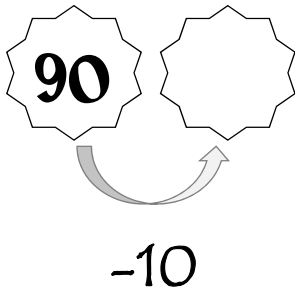
# Counting Back by 10s & Subtracting Tens

A. Count the number of blocks. Fill in the blanks.




35 - 10 = \_\_\_\_\_  \_\_\_\_\_ - \_\_\_\_\_ = \_\_\_\_\_

B. Count back by 10s. Fill in the missing numbers.



C. Solve the subtraction problems.

70	10	16	64	55	21
- 10	- 10	- 10	- 10	- 10	- 10
<input type="text"/>	<input type="text"/>	<input type="text"/>	<input type="text"/>	<input type="text"/>	<input type="text"/>

83	29 	48	97	35	76
- 10	- 10	- 10	- 10	- 10	- 10
<input type="text"/>	<input type="text"/>	<input type="text"/>	<input type="text"/>	<input type="text"/>	<input type="text"/>