

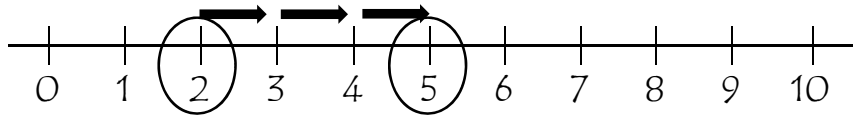


Adding on Number Lines

Below is a number line. It can help you add. Put your finger on 2. Jump three numbers to the right. That adds three. What number are you on now? Right! It's 5. 2 and 3 more is 5. $2 + 3 = 5$.

$2 + 3 =$

5



Use the number line to add. Write the answer in the box.

$3 + 4 =$



$2 + 7 =$



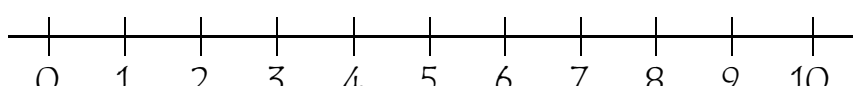
$0 + 8 =$



$1 + 9 =$



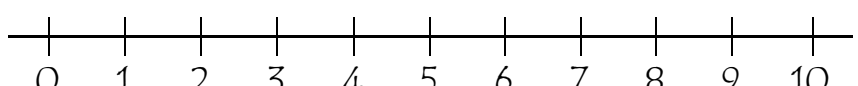
$3 + 7 =$



$4 + 4 =$



$2 + 6 =$



$1 + 8 =$

