




## Subtraction Practice

A. Solve the subtraction problems.

1.  $6 - 3 =$  \_\_\_\_\_



7.  $8 - 4 =$  \_\_\_\_\_

2.  $9 - 1 =$  \_\_\_\_\_

8.  $5 - 2 =$  \_\_\_\_\_


3.  $5 - 3 =$  \_\_\_\_\_

9.  $6 - 4 =$  \_\_\_\_\_

4.  $6 - 2 =$  \_\_\_\_\_

10.  $5 - 0 =$  \_\_\_\_\_

5.  $10 - 5 =$  \_\_\_\_\_




11.  $4 - 2 =$  \_\_\_\_\_

6.  $5 - 4 =$  \_\_\_\_\_

12.  $3 - 3 =$  \_\_\_\_\_

B. Follow the numbers in the order of your answers above to help the gecko find its friend.



		6	4	1	9	4	2	6	7
0	3	5	5	7	2	8	3	5	1
4	8	7	9	6	3	2	5	2	4
7	2	4	5	1	4	6	9	0	
3	9	3	5	0	8	3	2		

