





## Subtracting 0 and 1


Let's practice subtracting 0 and 1.


$3 - 0 =$  


$7 - 1 =$  


$6 - 1 =$  


$5 - 0 =$  


$2 - 1 =$  


$3 - 1 =$  


$1 - 0 =$  


$6 - 0 =$  

$4 - 0 =$  

$4 - 1 =$  

$8 - 1 =$  

$2 - 0 =$  

$7 - 0 =$  

$1 - 1 =$  