




## Subtraction Puzzles


Solve the subtraction problems. Use your **Fact Families** pages for help.

10	→ - 4	
↓ - 6		↓ - 4
	→ - 2	


15	→ - 9	
↓ - 6		↓ - 3
	→ - 6	




14	→ - 6	
↓ - 8		↓ - 4
	→ - 2	

11	→ - 4	
↓ - 6		↓ - 4
	→ - 2	



13	→ - 6	
↓ - 7		↓ - 5
	→ - 4	

9	→ - 4	
↓ - 2		↓ - 1
	→ - 3	