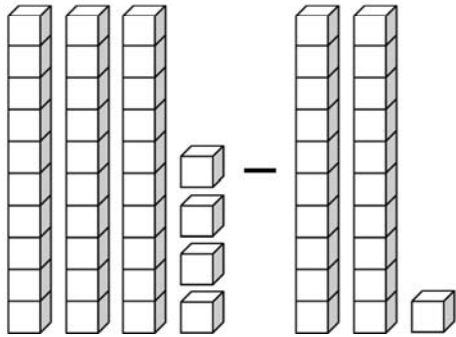
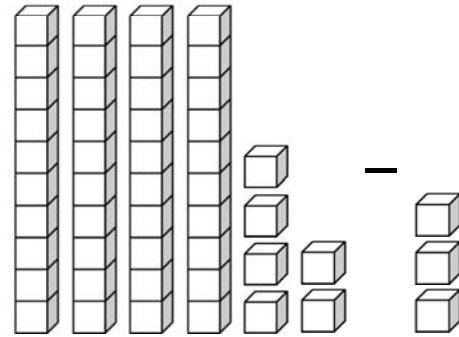


Subtracting Tens and Ones

A. Count the number of blocks. Fill in the blanks.



$$\underline{34} - \underline{21} = \underline{\quad}$$



$$\underline{\quad} - \underline{\quad} = \underline{\quad}$$

B. Let's practice subtracting tens and ones.

$$\begin{array}{r} 69 \\ - 47 \\ \hline \end{array}$$



$$\begin{array}{r} 78 \\ - 44 \\ \hline \end{array}$$

$$\begin{array}{r} 98 \\ - 63 \\ \hline \end{array}$$

$$\begin{array}{r} 74 \\ - 32 \\ \hline \end{array}$$

$$\begin{array}{r} 86 \\ - 56 \\ \hline \end{array}$$

$$\begin{array}{r} 95 \\ - 43 \\ \hline \end{array}$$



$$\begin{array}{r} 87 \\ - 2 \\ \hline \end{array}$$

$$\begin{array}{r} 19 \\ - 2 \\ \hline \end{array}$$

$$\begin{array}{r} 48 \\ - 6 \\ \hline \end{array}$$

$$\begin{array}{r} 59 \\ - 3 \\ \hline \end{array}$$

$$\begin{array}{r} 47 \\ - 5 \\ \hline \end{array}$$

$$\begin{array}{r} 36 \\ - 2 \\ \hline \end{array}$$