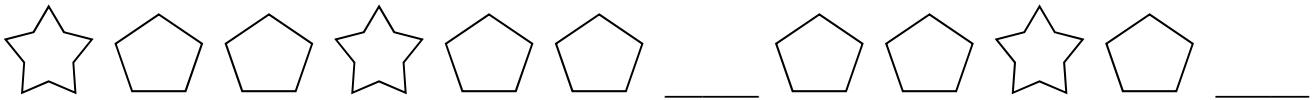


Let's Review!

A. Draw the missing shapes to complete the pattern.



B. Solve the addition problems. Fill in the blanks.

$$8 + \underline{\quad} = 10$$

$$3 + \underline{\quad} = 7$$

$$\underline{\quad} + 4 = 6$$

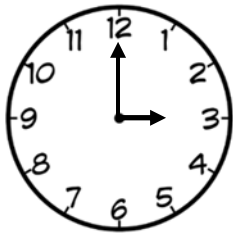
$$\underline{\quad} + 2 = 9$$



C. Write the words as numbers.

seven	four	ten	six	zero	three

D. Write the time.



E. Draw a shape.

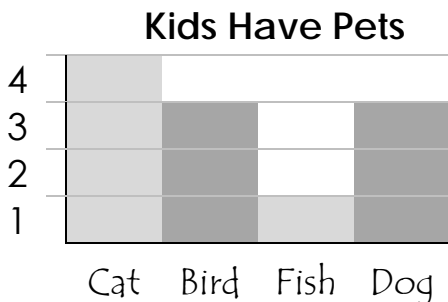


Hexagon

F. Solve the word problem.

Fifteen owls were sitting in a tree. Six flew away. How many were left?

G. Use the graph to answer the questions.



- How many animals are there in all?
- How many birds and dogs are there?
- How many more cats are there than fish?

a. _____ b. _____ c. _____