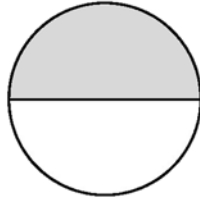




# Fractions in Words

Match each picture with the fraction in number form and in word form.

$$\frac{2}{3}$$



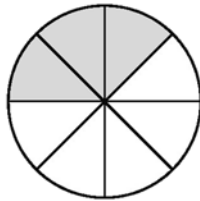
three eighths

$$\frac{1}{2}$$



two fourths


$$\frac{2}{4}$$



one half

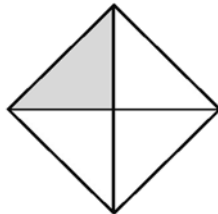


$$\frac{3}{5}$$



three fifths

$$\frac{3}{8}$$



two thirds

$$\frac{1}{4}$$



one fourth